

# Maths Revision Booklet

for CCEA GCSE 2-tier specification

# M6

*Conor McGurk*

Name:

© Conor McGurk and Colourpoint Creative Ltd 2019

ISBN: 978 1 78073 197 1

First Edition  
First Impression

Layout and design: April Sky Design  
Printed by: Peninsula Print and Design

All rights reserved. No part of this publication may be reproduced, stored in a retrieval system or transmitted in any form or by any means, electronic, mechanical, photocopying, scanning, recording or otherwise, without the prior written permission of the copyright owners and publisher of this book.



**Colourpoint Educational**

*An imprint of Colourpoint Creative Ltd*

Colourpoint House  
Jubilee Business Park  
21 Jubilee Road  
Newtownards  
County Down  
Northern Ireland  
BT23 4YH

Tel: 028 9182 0505

E-mail: [sales@colourpoint.co.uk](mailto:sales@colourpoint.co.uk)

Web site: [www.colourpoint.co.uk](http://www.colourpoint.co.uk)

**Publisher's Note:** This book has been written to help students preparing for the GCSE Mathematics specification from CCEA. While Colourpoint Educational and the authors have taken every care in its production, we are not able to guarantee that the book is completely error-free. Additionally, while the book has been written to closely match the CCEA specification, it is the responsibility of each candidate to satisfy themselves that they have fully met the requirements of the CCEA specification prior to sitting an exam set by that body. For this reason, and because specifications change with time, we strongly advise every candidate to avail of a qualified teacher and to check the contents of the most recent specification for themselves prior to the exam. Colourpoint Creative Ltd therefore cannot be held responsible for any errors or omissions in this book or any consequences thereof.



# Maths Revision Booklet


for CCEA GCSE 2-tier specification

# M6

*Conor McGurk*

## Contents

Revision Exercise 1A (non-calculator) .....	3
Revision Exercise 1B (non-calculator) .....	9
Revision Exercise 2A (with calculator) .....	15
Revision Exercise 2B (with calculator) .....	21
Problem Solving Questions.....	28
Answers .....	30



# Revision Exercise 1A

(non-calculator)



You must **not** use a calculator for this paper. Total mark for this paper is 50.

Figures in brackets printed down the right-hand side of pages indicate the marks awarded to each question or part question.

You should have a ruler, compasses, set-square and protractor.

1. Write the fraction  $\frac{36}{48}$  in its lowest terms.

Answer \_\_\_\_\_ [1]

- (a) Write 10% as:

- (i) a decimal,

Answer \_\_\_\_\_ [1]

- (ii) a fraction in its lowest terms.

Answer \_\_\_\_\_ [1]

- (b) Calculate:

- (i)  $\frac{3}{5}$  of 35

Answer \_\_\_\_\_ [2]

- (ii) 40% of 120

Answer \_\_\_\_\_ [2]

2. Complete the table below.

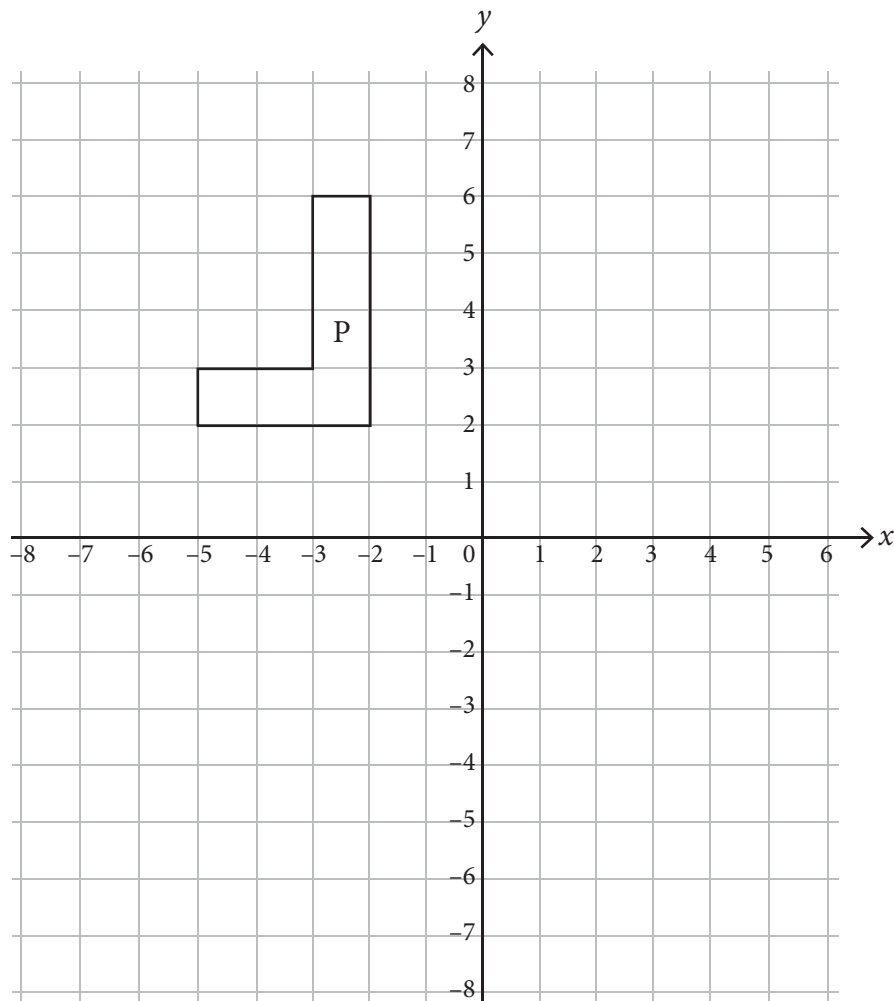
Shape	Order of rotational symmetry	Lines of symmetry
Rectangle		
Equilateral triangle		
Parallelogram		

[6]

3. Two angles of a parallelogram are in the ratio 3:2  
Find the size of the angles in the parallelogram.

Answer \_\_\_\_\_°; \_\_\_\_\_°; \_\_\_\_\_°; \_\_\_\_\_° [4]

4.



- (a) Show the position of P after a translation:

$$\begin{pmatrix} 5 \\ -4 \end{pmatrix}$$

Label the new shape Q.

[1]

- (b) Reflect the shape P in the line  $y = 1$   
Label this reflection R.

[2]

5. A school holds a draw to raise funds.  
Each of the 600 pupils in the school buys a ticket in the draw.  
The tickets are numbered 1 to 600.

(a) What is the probability that the ticket number 169 wins the draw?

Answer \_\_\_\_\_ [1]

(b) Find the probability that a ticket with a number greater than 400 wins the draw.

Answer \_\_\_\_\_ [2]

(c) One of the teachers says that the probability of a girl winning the draw is  $\frac{1}{2}$

(i) Explain why this may not be true.

Answer \_\_\_\_\_ [1]

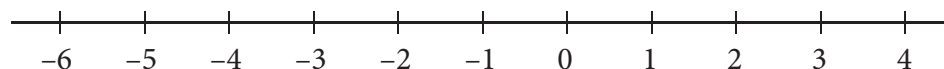
(ii) If the teacher is correct, how many girls attend the school?

Answer \_\_\_\_\_ [1]

6. Find the solution set of the inequality

$$-15 \leq 5n < 20$$

and represent the solution on the number line below.



[4]